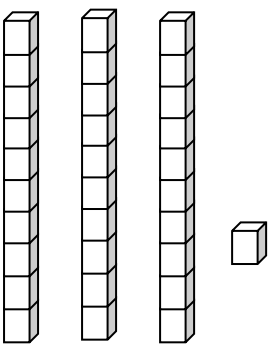
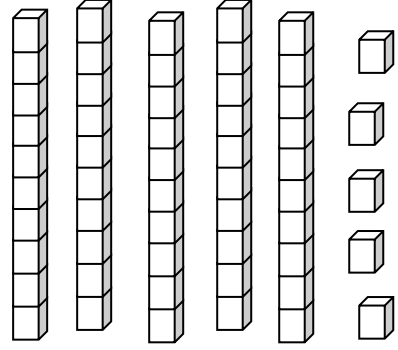
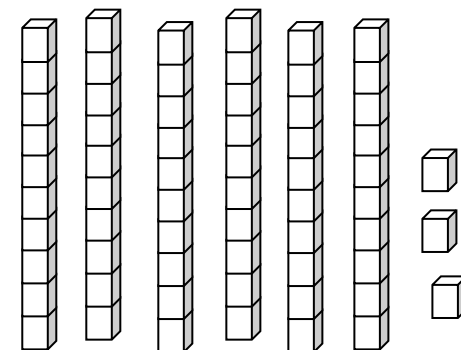
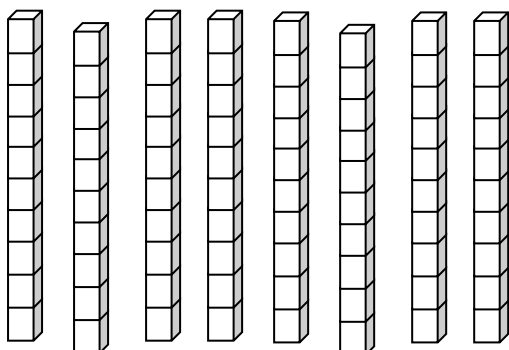
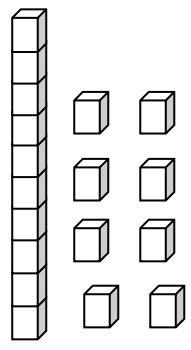
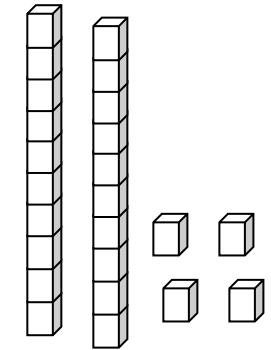


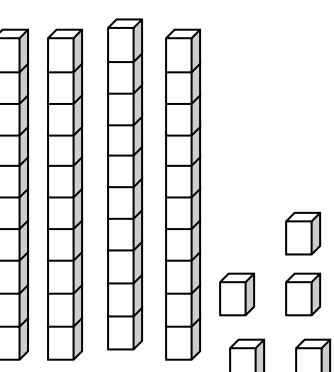
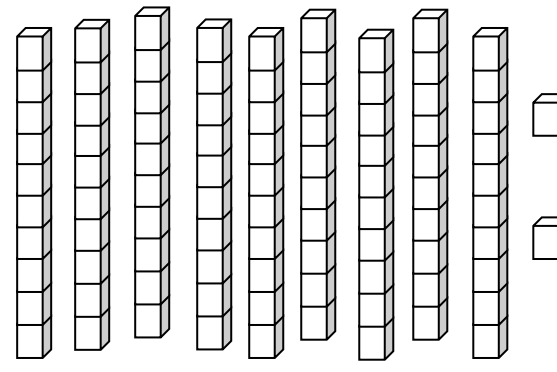
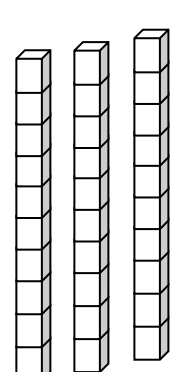
Οι αριθμοί μέχρι το 100

Όνομα: _____ Τάξη _____ Ημερομηνία _____


1. Να γράψεις τους αριθμούς όπως το παράδειγμα.

														
<table border="1"><tr><td>Δ</td><td>Μ</td></tr><tr><td>3</td><td>1</td></tr></table> <input type="text" value="31"/>	Δ	Μ	3	1	<table border="1"><tr><td>Δ</td><td>Μ</td></tr><tr><td></td><td></td></tr></table> <input type="text"/>	Δ	Μ			<table border="1"><tr><td>Δ</td><td>Μ</td></tr><tr><td></td><td></td></tr></table> <input type="text"/>	Δ	Μ		
Δ	Μ													
3	1													
Δ	Μ													
Δ	Μ													

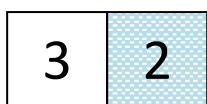
														
<table border="1"><tr><td>Δ</td><td>Μ</td></tr><tr><td></td><td></td></tr></table> <input type="text"/>	Δ	Μ			<table border="1"><tr><td>Δ</td><td>Μ</td></tr><tr><td></td><td></td></tr></table> <input type="text"/>	Δ	Μ			<table border="1"><tr><td>Δ</td><td>Μ</td></tr><tr><td></td><td></td></tr></table> <input type="text"/>	Δ	Μ		
Δ	Μ													
Δ	Μ													
Δ	Μ													

														
<table border="1"><tr><td>Δ</td><td>Μ</td></tr><tr><td></td><td></td></tr></table> <input type="text"/>	Δ	Μ			<table border="1"><tr><td>Δ</td><td>Μ</td></tr><tr><td></td><td></td></tr></table> <input type="text"/>	Δ	Μ			<table border="1"><tr><td>Δ</td><td>Μ</td></tr><tr><td></td><td></td></tr></table> <input type="text"/>	Δ	Μ		
Δ	Μ													
Δ	Μ													
Δ	Μ													

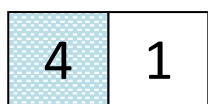
2. Κύκλωσε την αξία του χρωματισμένου ψηφίου.



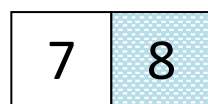
5 50



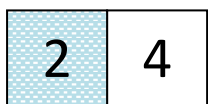
20 2




4 40



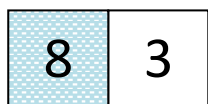
8 80



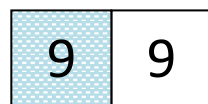
2 20



60 6



8 80



90 9

3. Να γράψεις μαθηματικές προτάσεις πρόσθεσης.

